


Name


## Step Up Exploring the Relative Position of 1 to 10

Trace over the grey numeral.


Write the numerals that come **just before** and **just after**.




1		3		5	6	7	8	9	10
---	--	---	--	---	---	---	---	---	----



1	2	3	4	5		7		9	10
---	---	---	---	---	--	---	--	---	----



1	2		4		6	7	8	9	10
---	---	--	---	--	---	---	---	---	----



	2		4	5	6	7	8	9	10
--	---	--	---	---	---	---	---	---	----