The image features a repeating zigzag pattern of black lines on a white background. A border of 20 simple smiley faces is arranged in a rectangular frame, connected by a black line. The word "MATHEMATICS" is centered in the middle of the page in a large, bold, outlined font.

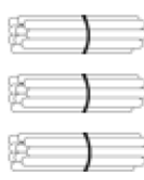

MATHEMATICS

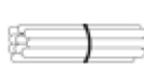

Place Value Houses



Name: _____



Write the number in each of the place value houses.

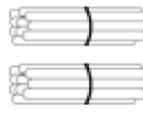

Teach **THIS**

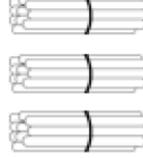

		
Tens	Ones	



		
Tens	Ones	



		
Tens	Ones	

		
Tens	Ones	

		
Tens	Ones	

		
Tens	Ones	

		
Tens	Ones	

		
Tens	Ones	









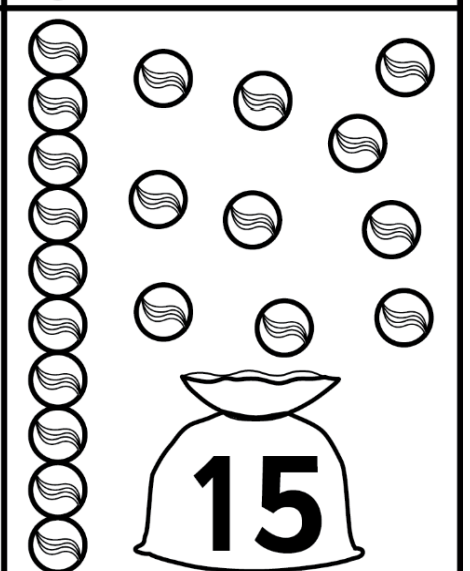
What is the smallest number in the houses?

What is the biggest number in the houses?

Tens and Ones Marbles

Name: _____

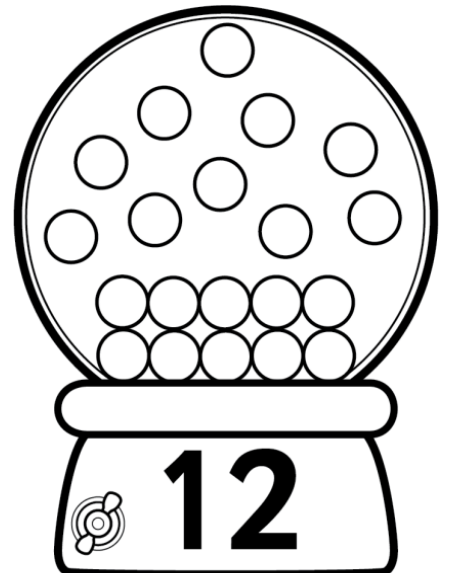
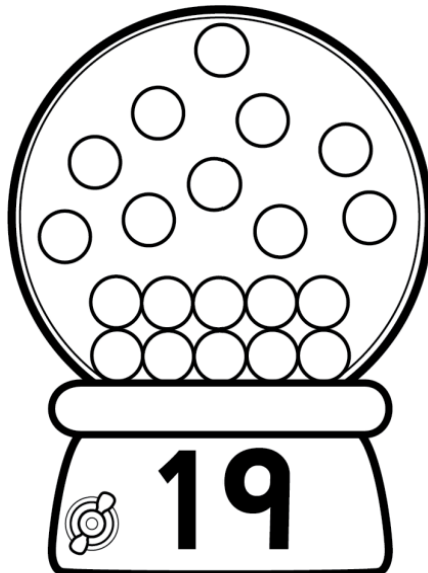
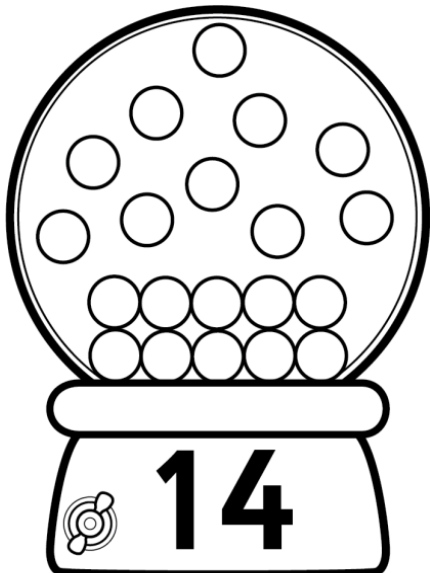
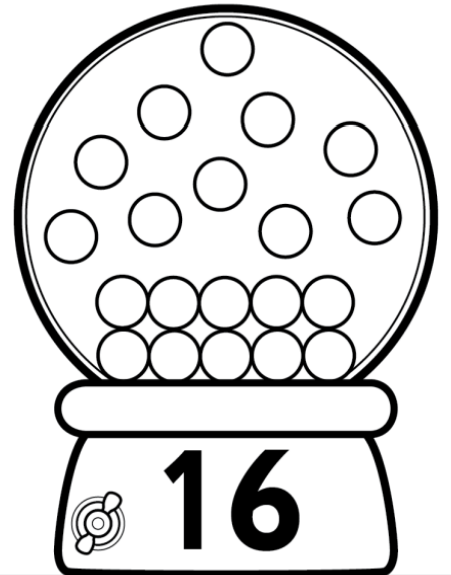
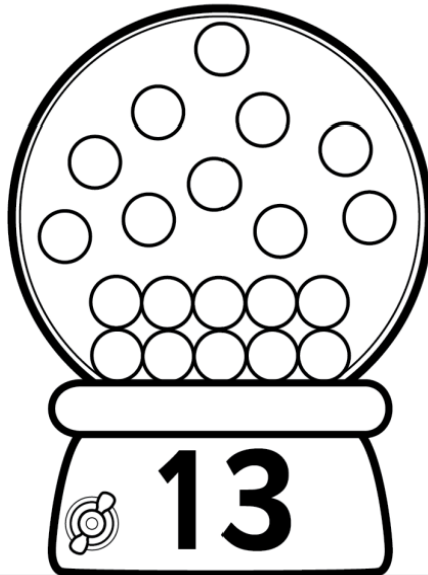
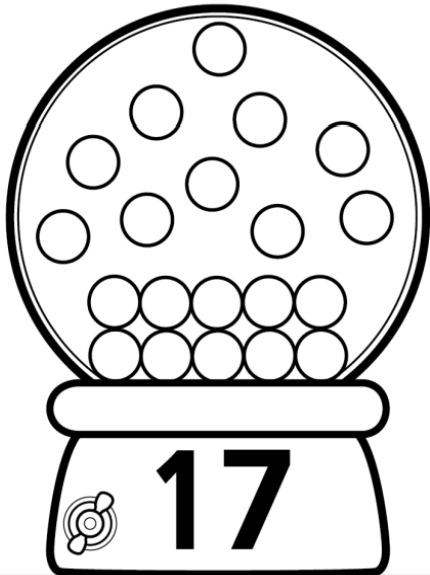

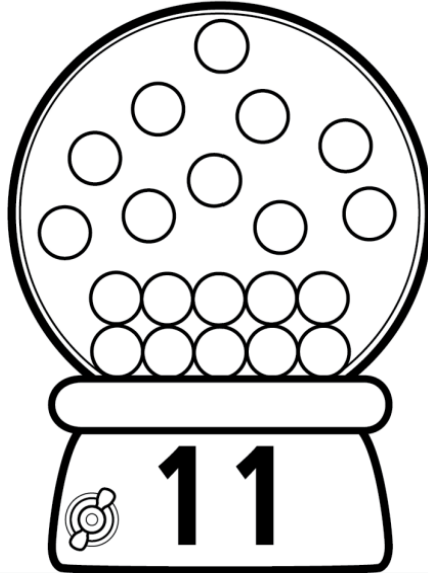
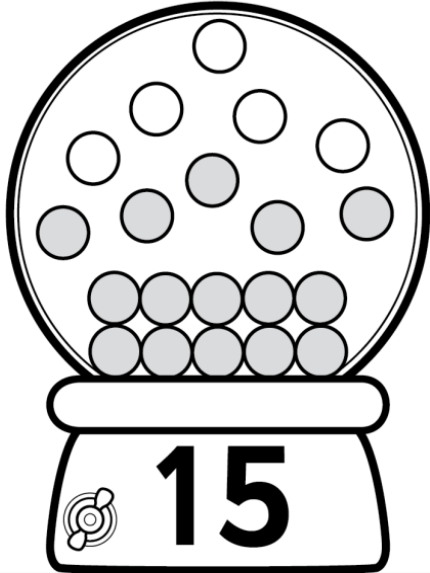
Teach **TEKS**

 <p>12</p>	 <p>11</p>	 <p>19</p>
 <p>14</p>		 <p>16</p>
 <p>17</p>	 <p>18</p>	 <p>15</p>

Tens and Ones Gumball

Name: _____

Teach **THIS**



Before and After

Name: _____

Teach **THIS**



2




8



14




9



11



8



10



16



19



7



18



5

Before and After 0 -30

Place the missing numbers on the number line.

Name: _____

Teach **THIS**



				8				
--	--	--	--	---	--	--	--	--



				5				
--	--	--	--	---	--	--	--	--



				12				
--	--	--	--	----	--	--	--	--



				4				
--	--	--	--	---	--	--	--	--



				17				
--	--	--	--	----	--	--	--	--



				20				
--	--	--	--	----	--	--	--	--



				26				
--	--	--	--	----	--	--	--	--

NUMBER CRUNCH

Write the number before and after.

1)

	32	
--	----	--

2)

Teach 

	9	
--	---	--

3)

	27	
--	----	--

4)

	34	
--	----	--

5)

	45	
--	----	--

6)

	21	
--	----	--

7)

	10	
--	----	--

8)

	48	
--	----	--

9)

	51	
--	----	--

10)

	36	
--	----	--

11)

	23	
--	----	--

12)

	55	
--	----	--

13)

	17	
--	----	--

14)

	29	
--	----	--

Expanding Numbers

to 100



Use these expanders to group these numbers and show place value.

1. 42

	Tens		Ones
--	------	--	------

2. 75

	Tens		Ones
--	------	--	------

3. 15

	Tens		Ones
--	------	--	------

4. 3

	Tens		Ones
--	------	--	------

5. 10

	Tens		Ones
--	------	--	------

6. 99

	Tens		Ones
--	------	--	------

7. 42

	Tens		Ones
--	------	--	------

8. 86

	Tens		Ones
--	------	--	------

START

2 tens and 3 ones

1 ten and 9 ones

8 ones

2 tens

5 ones

1 ten and 6 ones

2 tens and 9 ones

2 tens and 7 ones

1 ten and 2 ones

Swap with another player.

1 ten and 1 one

2 tens and 8 ones

Roll again.

1 ten and 7 ones

2 tens and 4 ones

7 ones

Swap with another player.

Place Value Match

6	15	24	10	28	21	3
20	27	2	25	14	8	12
9	18	13	29	23	17	5
16	4	22	7	26	11	19

Teach THIS

1. Roll a die. Move forward that number of spaces. Read the number aloud.
2. Place a counter on the matching number in the middle of the board. If that number is already covered, play moves to the next player.
3. The winner is the first player with 4 numbers covered in a row.

Go 3 spaces

1 ten and 8 ones

2 tens and 5 ones

1 ten

6 ones

2 tens and 1 ones

1 ten and 4 ones

3 ones

2 tens and 6 ones

4 ones

1 ten and 3 ones

2 ones

1 ten and 2 ones

9 ones

Roll again.

2 tens and 2 ones

1 ten and 3 ones


Go 3 spaces

Feature Match: 2D Shapes

Name: _____

Teach **THIS**

2D Shape	Edge	Corner
	4	4
	4	4
	3	3
	1 curved edge	0
	5	5
	6	6
	8	8
	1 curved edge	0



triangle




rectangle



pentagon



hexagon



circle



octagon



square




oval

Colour the Shapes

Name : _____

Teach 

1 side = red	3 sides = orange	4 sides = pink	5 sides = green
6 sides = blue	7 sides = purple	8 sides = yellow	10 sides = black



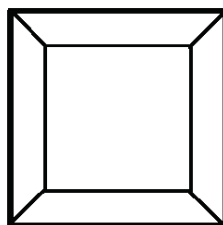

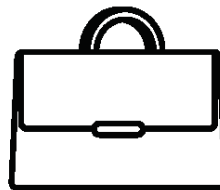


















2D Objects Matching

Name: _____


Cut and glue the objects under the matching shape.

Teach **THIS**



Friends Of Ten

Use different coloured pencils, or counters to match the numbers that add up to ten.





A grid of numbers for a matching activity. The numbers are arranged in a 7x5 grid around a central rocket ship. The rocket ship has the number 10 on its side. There are 15 stars scattered throughout the grid.



6	1	2	4	9
2	8	10	3	5
3	5		1	7
9	2		8	
5	6	3	4	9
8	7	1	5	7



Count and Add

Name: _____



Teach 



 +  = + =

 +  = + =

 +  = + =

 +  = + =

 +  = + =

 +  = + =

 +  = + =


 +  = + =

Let's Make 10




Name: _____


Teach **THIS**




$$\begin{array}{r} 3 \\ + \square \\ \hline 10 \end{array}$$




$$\begin{array}{r} 8 \\ + \square \\ \hline 10 \end{array}$$




$$\begin{array}{r} 5 \\ + \square \\ \hline 10 \end{array}$$




$$\begin{array}{r} 7 \\ + \square \\ \hline 10 \end{array}$$



$$\begin{array}{r} 10 \\ + \square \\ \hline 10 \end{array}$$




$$\begin{array}{r} 0 \\ + \square \\ \hline 10 \end{array}$$



$$\begin{array}{r} 9 \\ + \square \\ \hline 10 \end{array}$$



$$\begin{array}{r} 1 \\ + \square \\ \hline 10 \end{array}$$



$$\begin{array}{r} 6 \\ + \square \\ \hline 10 \end{array}$$